


Name _____

Time to the Hour and Half Hour

It is zero minutes after the hour.
Look at how you write this time.




It is 30 minutes after the hour.
Look at how you write this time.




Look at the clock hands. Write the time.

1.



2.



3.




4.



5.



6.



Name _____

Time to 5 Minutes

The minute hand moves from one number to the next in 5 minutes.

Start at the 12. Count by fives.

Stop at the number the minute hand points to.

The hour is 8 o'clock.

It is 20 minutes after 8:00.



Look at the clock hands. Write the time.

1. 



2. 



3. 



4. 



5. 



6. 



Name _____

Practice Telling Time

Use the clock hands to tell time.

First find the hour.


The hour is 11.

Now figure out minutes.

When the minute hand points to the 3 it is quarter past.

It is 15 minutes past 11.

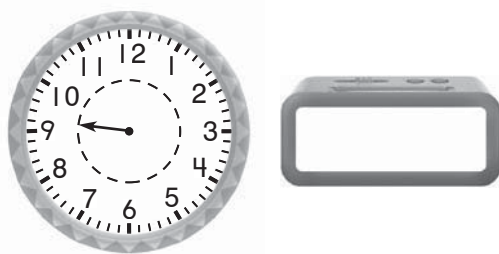
The time is quarter past 11.



Draw the minute hand to show the time.

Write the time.


1. quarter past 9



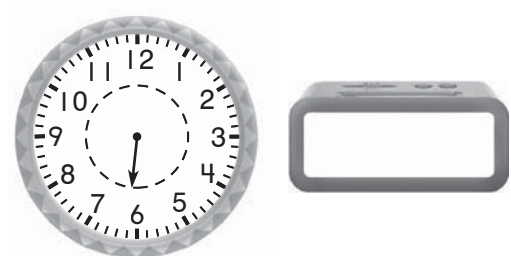
2. 30 minutes after 11



3. half past 10



4. 15 minutes after 6



Name _____

A.M. and P.M.

A.M. times *start* after midnight.
A.M. times *end* before noon.
get dressed for school

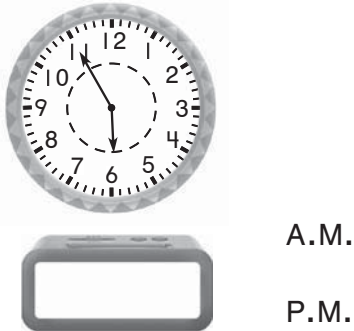


P.M. times *start* after noon.
P.M. times *end* before midnight.
tell a bedtime story




Write the time. Then circle A.M. or P.M.

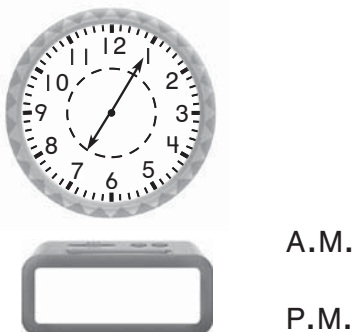
1. finish homework




2. go to morning recess



3. eat breakfast



4. get ready for bed



Name _____

Units of Time

There are about 30 days in 1 month.

April						
Sunday	Monday	Tuesday	Wednesday	Thursday	Friday	Saturday
		1	2	3	4	5
6	7	8	9	10	11	12
13	14	15	16	17	18	19
20	21	22	23	24	25	26
27	28	29	30			

May						
Sunday	Monday	Tuesday	Wednesday	Thursday	Friday	Saturday
				1	2	3
4	5	6	7	8	9	10
11	12	13	14	15	16	17
18	19	20	21	22	23	24
25	26	27	28	29	30	31

The month of April has 30 days.

The month of May has 31 days.

Are there more days in April or in May? May

There are 7 days in 1 week.

April						
Sunday	Monday	Tuesday	Wednesday	Thursday	Friday	Saturday
20	21	22	23	24	25	26

April						
Sunday	Monday	Tuesday	Wednesday	Thursday	Friday	Saturday
		1	2	3	4	5
6	7	8	9	10	11	12
13	14	15	16	17	18	19
20	21	22	23	24	25	26
27	28	29	30			

April has 4 weeks and 2 days.

Use the calendars to answer the questions.

1. Are there fewer days in April or in May? _____

2. In May, there are 4 weeks and _____ days.